




Medieval Mile Museum, 2 St Mary's Lane, Kilkenny, R95K276
Open Daily from 09:30 - 17:00

THIS COAT OF ARMS
BELONGS TO: _____



What do the colours and symbols you chose mean in the Middle Ages?:

Medieval Merchants Math Problems

Name: _____ Date: _____

John Archer is a merchant in Kilkenny in 1588. He is checking his orders to make sure everything adds up to 100 pence. Can you help him balance his ledger?

1. His wife Honoria has ordered 2 new dresses that cost 12 pence and 18 pence. How much do her dresses cost?

$$\underline{\quad} + \underline{\quad} = \underline{\quad}$$



2. John ordered two new pairs of boots, and a doublet. The two pairs of boots cost 24 pence. How much was his doublet?

$$\underline{\quad} + \underline{\quad} = \underline{60}$$



3. John also bought a petticoat for his daughter. If he spent 100 pence in total, how much did he spend on the petticoat?

$$\underline{\quad} + \underline{\quad} = \underline{\quad}$$





Medieval
Mile
Museum

Medieval Mile Museum, 2 St Mary's Lane, Kilkenny, R95K276

Open Daily from 09:30 - 17:00

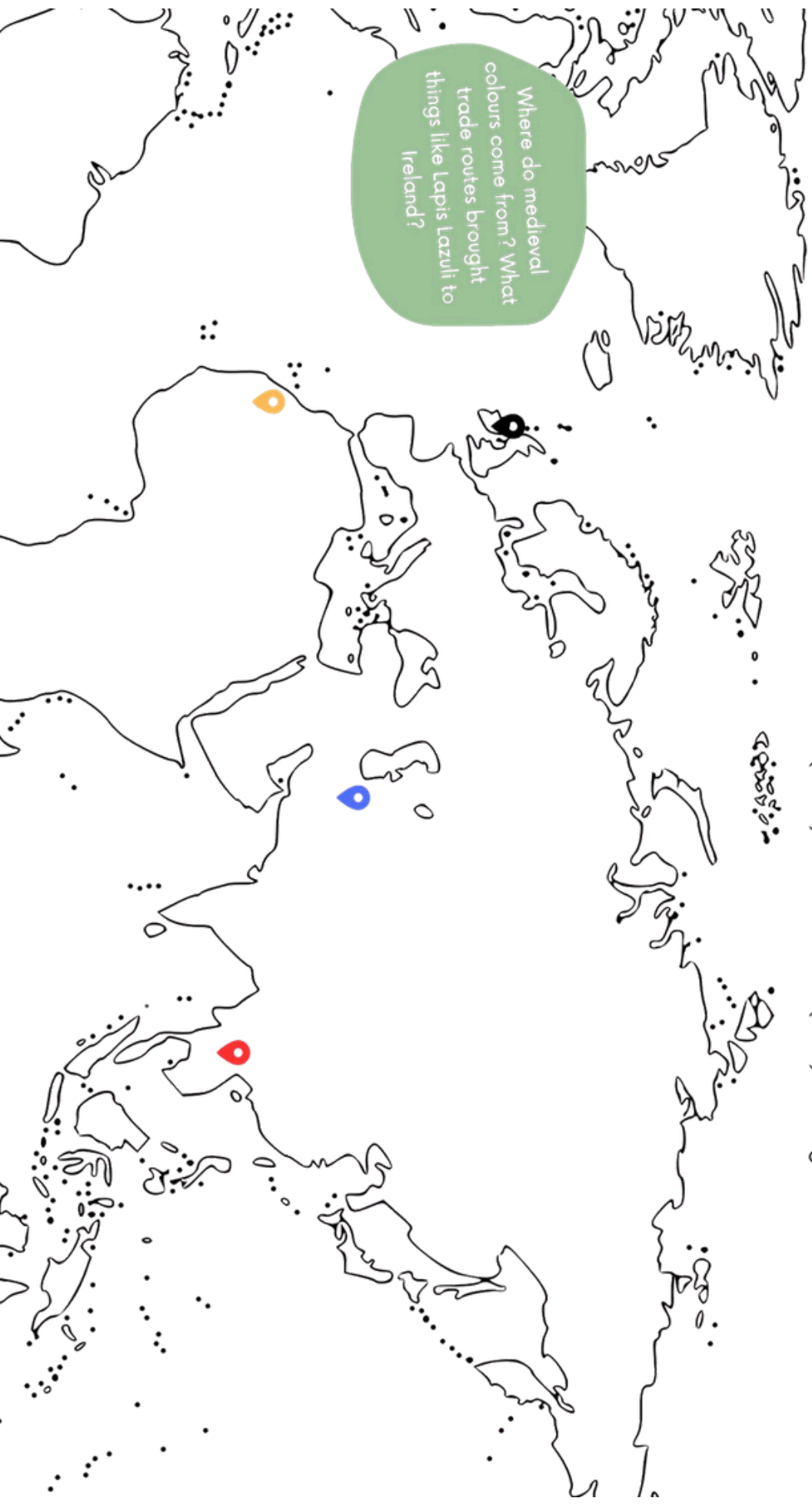
Let's Travel Around The World!


NAME

DATE

Can you draw trade routes that brought Lapis Lazuli (blue), brazilwood (red), and gold to Ireland?

Where do medieval colours come from? What trade routes brought things like Lapis Lazuli to Ireland?





Medieval Mile Museum, 2 St Mary's Lane, Kilkenny, R95K276
Open Daily from 09:30 – 17:00

Name: _____

b	a	g	g	b	x	b	c	h	o	o	o	l
c	i	a	a	l	c	l	m	u	c	c	k	j
t	e	u	u	u	d	e	y	e	t	t	p	w
m	g	r	r	e	y	e	l	l	o	o	w	v
a	r	e	f	e	g	e	l	w	x	x	l	z
k	u	u	u	n	r	n	b	l	a	a	c	k
h	r	r	j	t	r	t	r	s	e	e	n	k
e	i	i	i	e	e	p	e	n	c	c	i	l
r	d	a	a	p	n	r	q	x	a	a	p	z

Medieval Colours Word Hunt

Direction: Search for and circle the hidden words. Then match the word to the colour fact!

- | | |
|--------|------------------|
| blue | Made from plants |
| green | Made from bugs |
| yellow | Made from a rock |
| red | Most expensive |
| black | Least expensive |